

Section 1

Put the numbers in order, starting with the lowest.

11 **6** **5** **8**

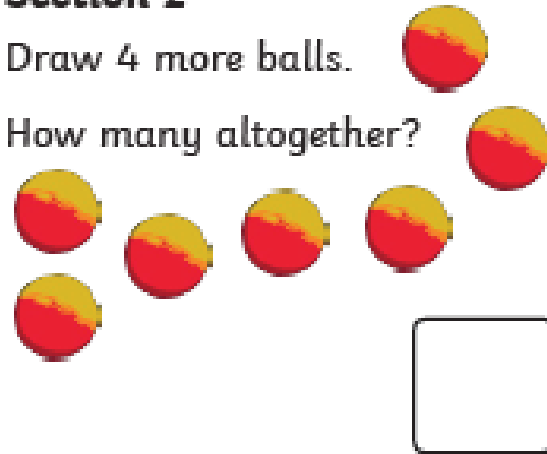
<input type="text"/>	<input type="text"/>	<input type="text"/>	<input type="text"/>
----------------------	----------------------	----------------------	----------------------



Section 2

Draw 4 more balls.

How many altogether?



Section 3

$$8 + 2 = \square$$

$$7 - 5 = \square$$

$$5 + 6 = \square$$

Section 4

Nina eats 6 sweets.
How many sweets are left?



Section 5


Group the cookies in twos.

How many groups are there?




Section 6

Tick the coins which add to 11p.



Section 7

Draw 8 spots onto the ladybird. An equal number on each side.



Section 8

Fill in the missing number.

12, 14, , 18, 20



Section 1

Which number is 5 more than 7? Tick the answer.

12

14

10



Section 2

Draw 4 more snowflakes.

How many do you have altogether?



Section 3

$$7 + 4 = \square$$

$$9 - 6 = \square$$

$$4 + 8 = \square$$

Section 4

Aliyan spends 6 £1 coins.

How much does he have left?



Section 5

Group the butterflies in twos.

How many groups are there?



Section 6

Circle the even numbers.


14 5

11

18 8

Section 7

Draw 11 spots onto the leopard, putting at least 2 on his head.



Section 8

What is the missing number?

20, 30, 40, ?, 60, 70.



Section 1

Put these numbers in order, starting with the highest.

15 22 17 32 37 29



Section 2

How long is the snake?



Section 3

$18 - 9 = \square$

$18 + 7 = \square$

$18 - 11 = \square$

Section 4

Belle has £9 and is given £8 more. How much does she have now?



Section 5

Share the biscuits evenly into 2 boxes. How many are in each box?



Section 6

If $13 = 10 + 3$, what is 31 ?

Section 7

How many chocolate bars can I buy for 45p?



Section 8

What number is next?

55, 50, 45, 40,

