


If you had 10 glass bottles and 3 plastic bottles, how many bottles are there altogether?



If you had 5 milkshakes and 2 fizzy drinks, how many drinks do you have in total?



If you had 14 squares of chocolate and 5 chocolate fingers, how many do you have in total?



If you have 5 blackbirds and 9 robins in your garden, how many are there?



If you had 5 cherry cakes and 5 plain cakes, how many would you have altogether?




If you had 5 books and 6 magazines, how many do you have?



If you had 12 jelly beans and 4 lollipops, how many would you have in total?




If you had 8 hotdogs and 3 portions of chips, how many would you have altogether?



If you had 3 marbles and 2 dice, how many do you have in total?



If you had 4 apples and 3 pears, how many do you have?



If you had 8 milk cartons and 9 juice cartons, how many would you have altogether?



If you have 10 boiled eggs and 6 fried eggs, how many would you have in total?

